

# Şekil Sayı Eşleştirme

×

= 5

○

= 7

□

= 1

+

= 0

△

= 6

▽

= 9

→

= 8

◇

= 4

⬠

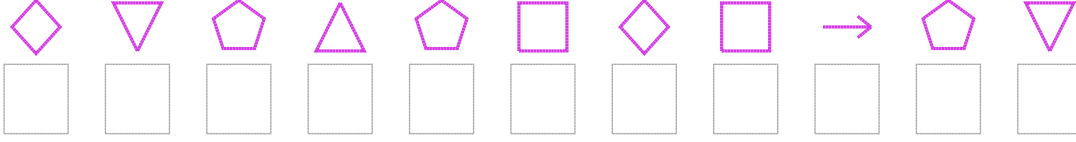
= 3

☆

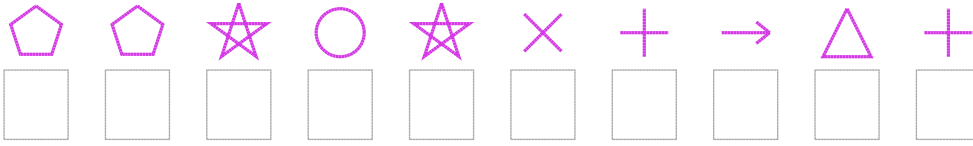
= 2

Aşağıdaki uzun şifreleri hatasız çözerek altlarına yazın:

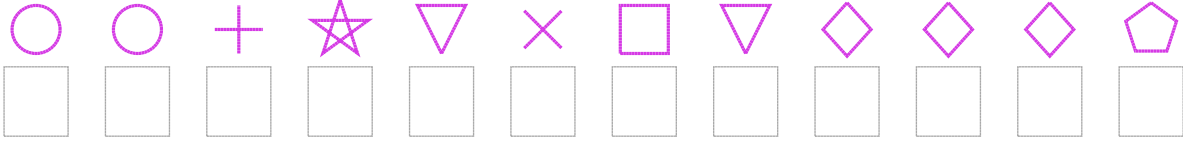
1. Şifre



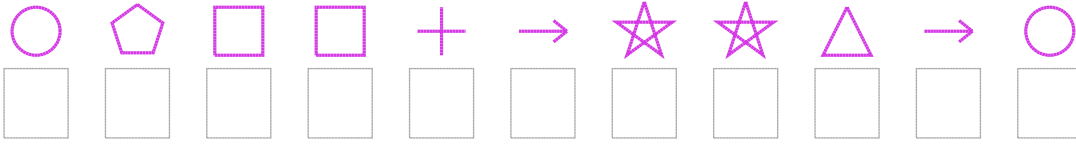
2. Şifre



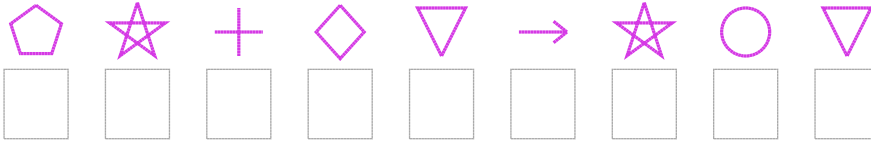
3. Şifre



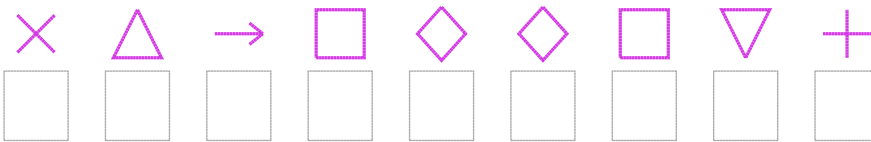
4. Şifre



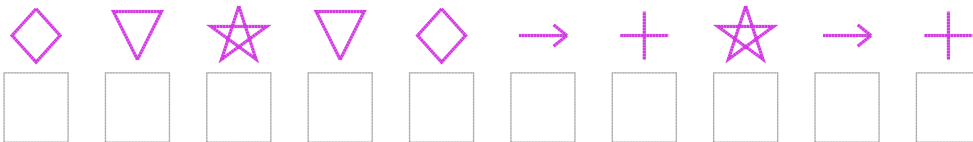
5. Şifre



6. Şifre



7. Şifre



□ BONUS: 1. ve 2. şifrenin üçüncü rakamının toplamı kaçtır? .....

## Cevap Anahtarı

1. Şifre: 49363141839

2. Şifre: 3327250860

3. Şifre: 770295194443

4. Şifre: 73110822687

5. Şifre: 320498279

6. Şifre: 568144190

7. Şifre: 4929480280

□ Bonus Soru Cevabı: 5